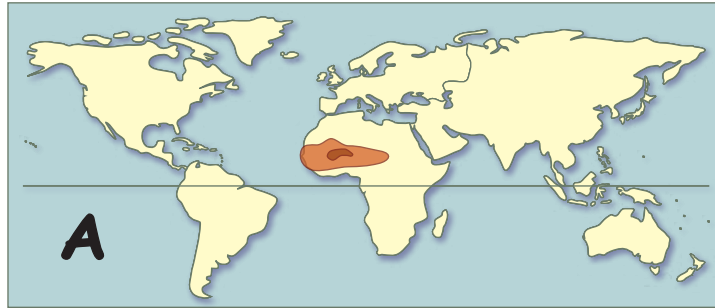


Imperial Geography (Famous Empires of the Past)



A

On each short line, write the letter of the map that shows that empire.

On the long line below, write the name of a modern country in the core area of the empire.

_____ **Persian Empire**
(Southwest Asia)



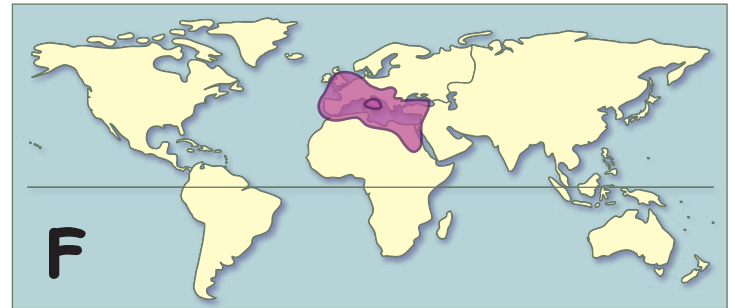
E

_____ **Han Dynasty**
(East Asia)



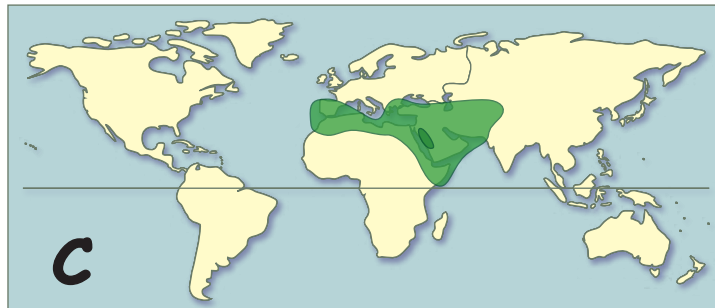
B

_____ **Mauryan Empire**
(South Asia)



F

_____ **Roman Empire**
(southern Europe)



C

_____ **Islamic Caliphate**
(Arabia, North Africa)



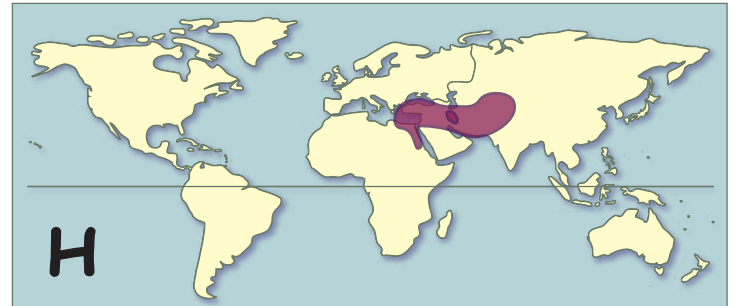
G

_____ **Mongol Horde**
(East and Central Asia)



D

_____ **Mali/Songhai**
(West Africa)



H

_____ **Inca Empire**
(South America)