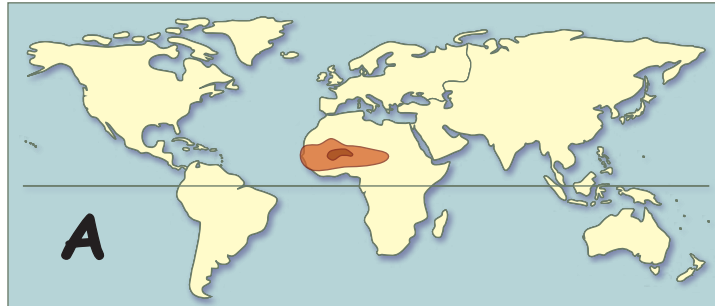


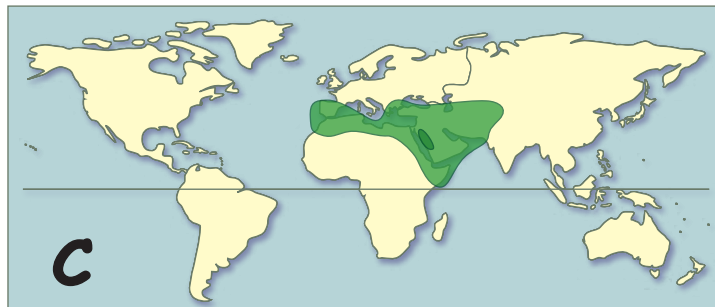
# Imperial Geography (Famous Empires of the Past)



**A**



**B**



**C**



**D**

On each short line, write the letter of the map that shows that empire. On the long lines below, write the names of two modern countries in the core area of the empire.

\_\_\_ Persian Empire

\_\_\_\_\_

\_\_\_\_\_

\_\_\_ Han Dynasty

\_\_\_\_\_

\_\_\_\_\_

\_\_\_ Mauryan Empire

\_\_\_\_\_

\_\_\_\_\_

\_\_\_ Roman Empire

\_\_\_\_\_

\_\_\_\_\_

\_\_\_ Islamic Caliphate

\_\_\_\_\_

\_\_\_\_\_

\_\_\_ Mongol Horde

\_\_\_\_\_

\_\_\_\_\_

\_\_\_ Mali/Songhai

\_\_\_\_\_

\_\_\_\_\_

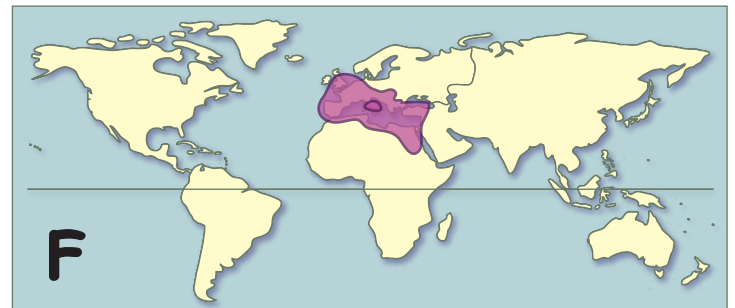
\_\_\_ Inca Empire

\_\_\_\_\_

\_\_\_\_\_



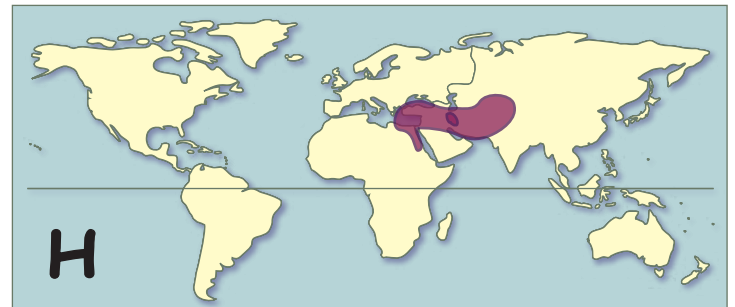
**E**



**F**



**G**



**H**